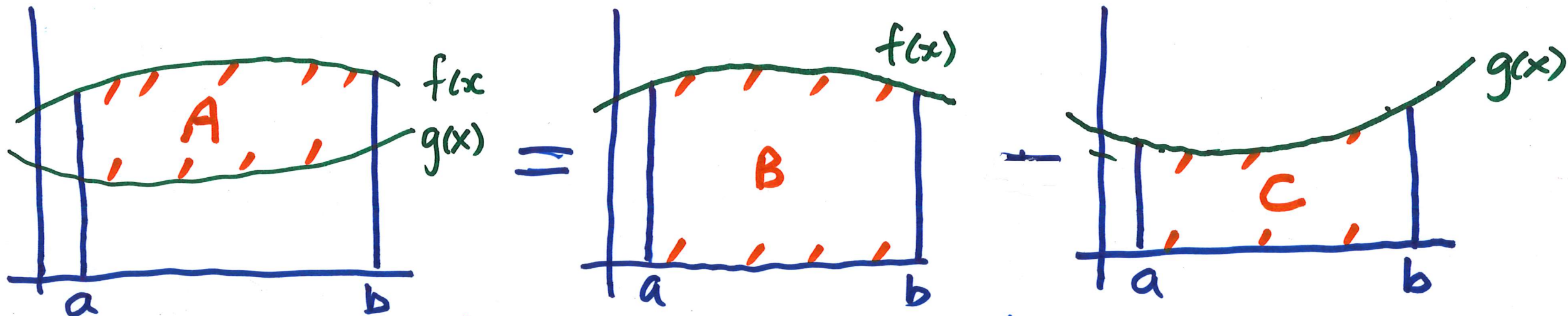
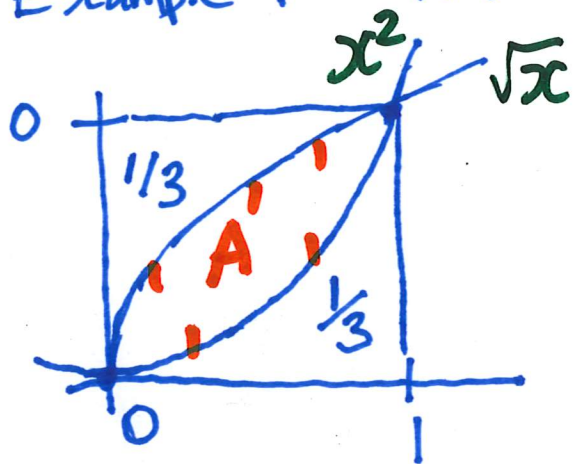


## 6.1 Areas Between Curves



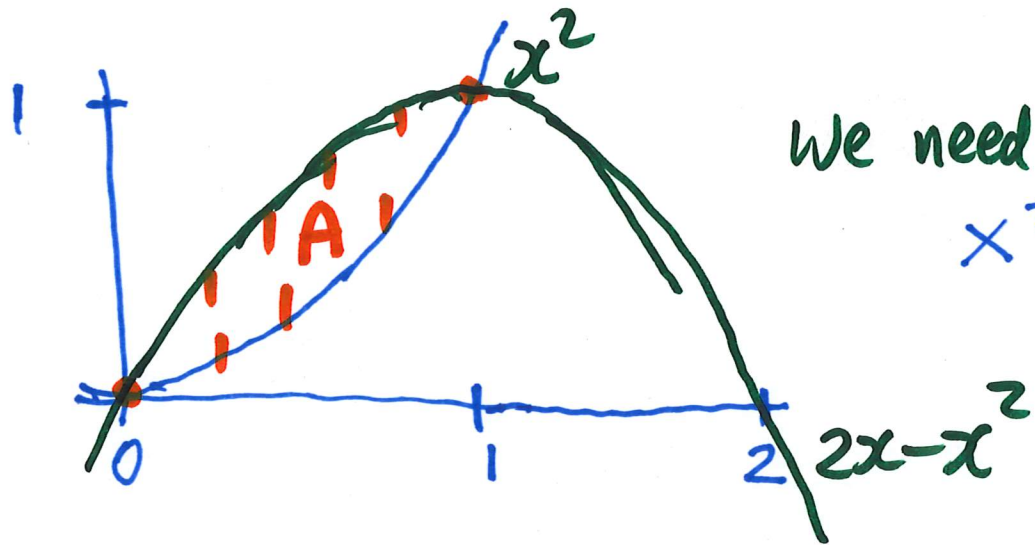
$$A = B - C = \int_a^b f(x) dx - \int_a^b g(x) dx = \int_a^b (f(x) - g(x)) dx$$

Example 1 What is the area between  $\sqrt{x}$  and  $x^2$  on  $[0, 1]$



$$A = \int_0^1 (\sqrt{x} - x^2) dx = \left[ \frac{2}{3} x^{3/2} - \frac{1}{3} x^3 \right]_0^1 = \left( \frac{2}{3} - \frac{1}{3} \right) - 0 = \frac{1}{3}$$

Example 2 What is the area between  $y=x^2$  and  $y=2x-x^2$  ?



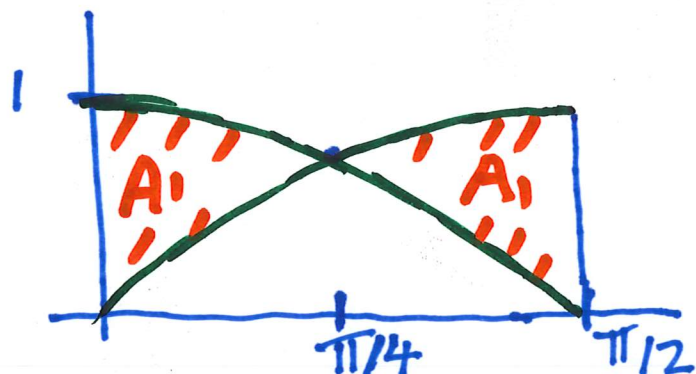
We need to solve  $f(x) = g(x)$  to find their intersections.

$$\begin{aligned} x^2 &= 2x - x^2 &\Rightarrow x^2 - 2x + x^2 &= 0 \\ &&\Rightarrow 2x^2 - 2x &= 0 \\ &&\Rightarrow 2x(x-1) &= 0 \\ &&\Rightarrow x &= 0 \text{ or } x = 1. \end{aligned}$$

$$A = \int_0^1 (2x - x^2 - x^2) dx = \int_0^1 (2x - 2x^2) dx = \left[ x^2 - \frac{2}{3}x^3 \right]_0^1 = \left( 1 - \frac{2}{3} \right) - 0 = \frac{1}{3}$$

$$A = \int_0^1 (x^2 - (2x - x^2)) dx = \dots = -\frac{1}{3}$$


Example 3. Find the area bounded by  $\sin x$ ,  $\cos x$ ,  $x=0$ ,  $x=\frac{\pi}{2}$



$$\begin{aligned} A &= A_1 + A_2 = 2 \int_0^{\pi/4} (\cos x - \sin x) dx \\ &= 2 \left[ \sin x + \cos x \right]_0^{\pi/4} = 2 \left( \sin \frac{\pi}{4} + \cos \frac{\pi}{4} \right) \\ &\quad - 2(\sin 0 + \cos 0) \end{aligned}$$

$$\pi/2 = 90^\circ$$

$$\pi/4 = 45^\circ$$



$$\sin \frac{\pi}{4} = \frac{1}{\sqrt{2}}$$

$$\cos \frac{\pi}{4} = \frac{1}{\sqrt{2}}$$

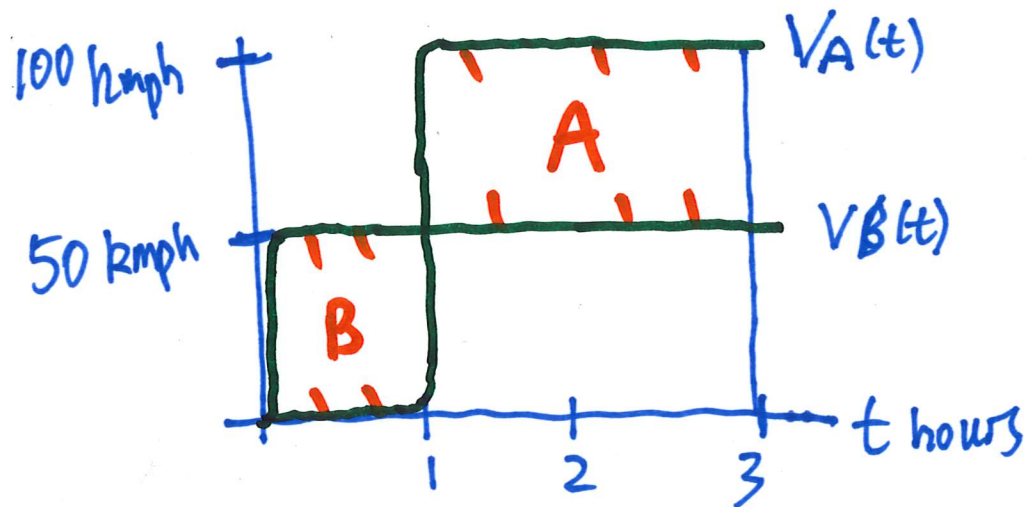
$$= 2 \left( \frac{1}{\sqrt{2}} + \frac{1}{\sqrt{2}} \right) - 2(0+1)$$

$$= 4/\sqrt{2} - 2 = 2\sqrt{2} - 2.$$

$$\int_0^{\pi/2} (\cos x - \sin x) dx = A_1 - A_1 = 0$$

$$\int_0^{\pi/2} (\cos x - \sin x) dx = \text{Exercise}$$

### Example 4

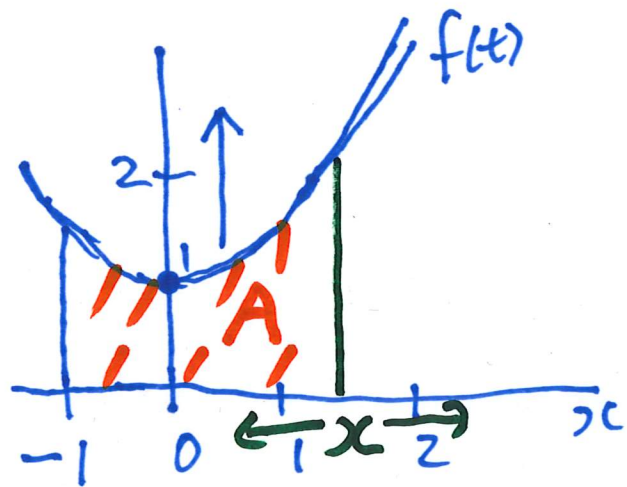


$$\int_0^3 (V_A(t) - V_B(t)) dt = A - B =$$

$$> 0$$

= the distance car A is ahead (if +ve)  
or behind (if -ve) car B after 3 hours.

## Area Functions



FTC (1)

$$\text{Let } A(x) = \int_{-1}^x (1+t^2) dt$$

$$\begin{aligned} \text{FTC (2)} &= \left[ t + \frac{1}{3}t^3 \right]_{-1}^x = \left( x + \frac{1}{3}x^3 \right) - \left( -1 - \frac{1}{3} \right) \\ &= x + \frac{1}{3}x^3 + \frac{4}{3} \end{aligned}$$

$$A(-1) = \int_{-1}^{-1} (1+t^2) dt = 0$$

If  $A(x) = \int_{-1}^x (1+t^2) dt$  then  $A'(x) = f(x)$

$$A'(x) = 1+x^2$$

$$A(x) = \int (1+x^2) dx = x + \frac{1}{3}x^3 + \underline{C}$$

$$A(-1) = -1 - \frac{1}{3} + C = 0 \Rightarrow C = \frac{4}{3}$$

$$A(x) = x + \frac{1}{3}x^3 + \frac{4}{3}$$

# Properties of Definite Integrals

We used  $\int_a^b f(x) dx - \int_a^b g(x) dx = \int_a^b (f(x) - g(x)) dx$

Proof Let  $F(x)$  and  $G(x)$  be antiderivatives of  $f(x)$  and  $g(x)$ .  
( $\Rightarrow F'(x) = f(x)$  and  $G'(x) = g(x)$ )

$$\int_a^b f(x) dx - \int_a^b g(x) dx \stackrel{\text{FTC(2)}}{=} [F(x)]_a^b - [G(x)]_a^b = (F(b) - F(a)) - (G(b) - G(a)) \\ = F(b) - F(a) - G(b) + G(a).$$

$$\int_a^b \underline{(f(x) - g(x))} dx = [F(x) - G(x)]_a^b = (F(b) - G(b)) - (F(a) - G(a)) \quad // ? \checkmark \\ = F(b) - \underbrace{F(a)} - G(b) + G(a)$$

①  $\int_a^b c f(x) dx = c \int_a^b f(x) dx$

②  $\int_a^b (f(x) \pm g(x)) dx = \int_a^b f(x) dx \pm \int_a^b g(x) dx$

③  $\int_a^b f(x) dx = - \int_b^a f(x) dx$

④  $\int_a^a f(x) dx = 0$

⑤  $\int_a^b f(x) dx = \int_a^c f(x) dx + \int_c^b f(x) dx$

